

10 times table

Name: _____

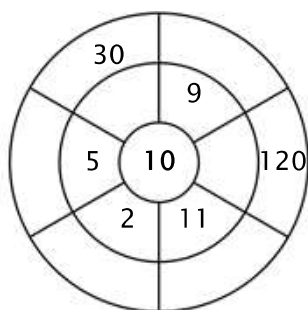
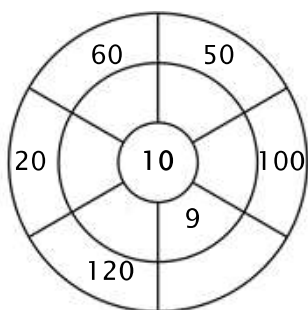
Exercise 1:

Color in all of the boxes that are the solutions of this time table.

20	70	142	50	20
33	22	36	60	45
84	95	67	90	90
70	120	100	10	40
110	56	80	30	30

Exercise 2:

Complete the circle by multiplying the number in the center by the middle ring to get the outer numbers.



Exercise 3:

Fill in the correct product.

a) $10 \times 3 = \underline{\quad}$

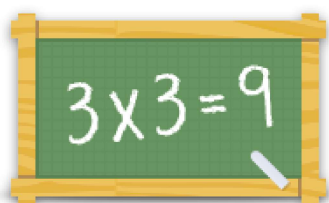
b) $10 \times 8 = \underline{\quad}$

c) $10 \times 12 = \underline{\quad}$

d) $10 \times 7 = \underline{\quad}$

e) $10 \times 1 = \underline{\quad}$

f) $10 \times 4 = \underline{\quad}$



For more worksheets, games and exercises:
www.timestables.com