

# 11 times table

Name: \_\_\_\_\_

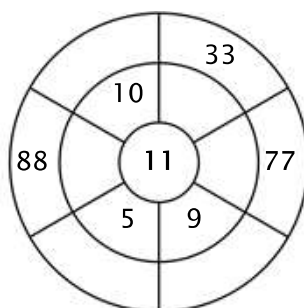
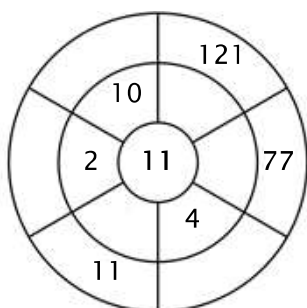
## Exercise 1:

Color in all of the boxes that are the solutions of this time table.

110	11	17	121	66
22	121	88	90	55
132	77	25	110	3
82	55	132	22	99
50	33	44	80	33

## Exercise 2:

Complete the circle by multiplying the number in the center by the middle ring to get the outer numbers.



## Exercise 3:

Fill in the correct product.

a)  $11 \times 6 = \underline{\hspace{2cm}}$

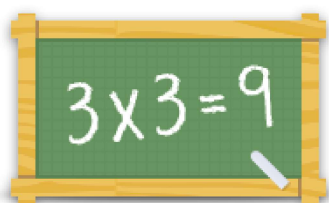
b)  $11 \times 12 = \underline{\hspace{2cm}}$

c)  $11 \times 10 = \underline{\hspace{2cm}}$

d)  $11 \times 9 = \underline{\hspace{2cm}}$

e)  $11 \times 11 = \underline{\hspace{2cm}}$

f)  $11 \times 1 = \underline{\hspace{2cm}}$



For more worksheets, games and exercises:  
[www.timestables.com](http://www.timestables.com)