

12 times table

Name: _____

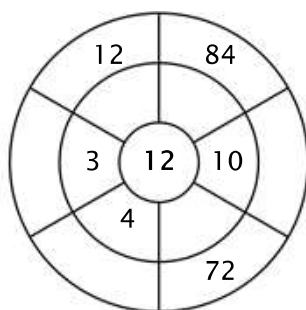
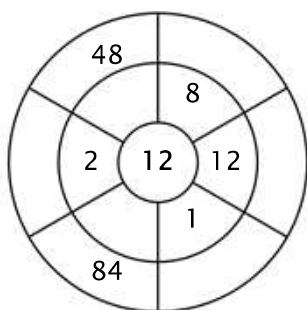
Exercise 1:

Color in all of the boxes that are the solutions of this time table.

36	66	60	84	85
108	12	36	48	60
24	56	33	99	65
74	16	48	72	120
120	110	24	11	86

Exercise 2:

Complete the circle by multiplying the number in the center by the middle ring to get the outer numbers.



Exercise 3:

Fill in the correct product.

a) $12 \times 1 = \underline{\quad}$

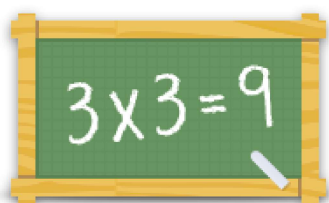
b) $12 \times 11 = \underline{\quad}$

c) $12 \times 8 = \underline{\quad}$

d) $12 \times 2 = \underline{\quad}$

e) $12 \times 12 = \underline{\quad}$

f) $12 \times 4 = \underline{\quad}$



For more worksheets, games and exercises:
www.timestables.com