

3 times table

Name: _____

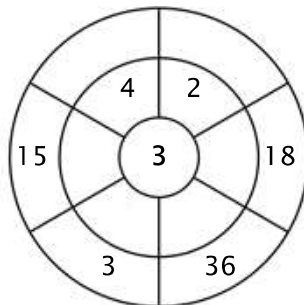
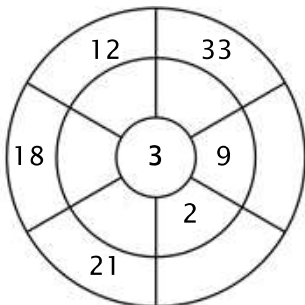
Exercise 1:

Color in all of the boxes that are the solutions of this time table.

9	25	33	28	36
9	36	7	3	16
5	29	11	18	35
30	24	18	21	15
38	12	21	15	33

Exercise 2:

Complete the circle by multiplying the number in the center by the middle ring to get the outer numbers.



Exercise 3:

Fill in the correct product.

a) $3 \times 6 =$ _____

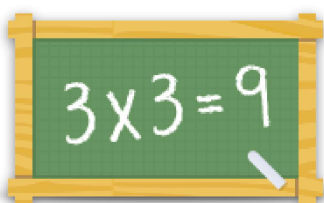
b) $3 \times 8 =$ _____

c) $3 \times 2 =$ _____

d) $3 \times 1 =$ _____

e) $3 \times 7 =$ _____

f) $3 \times 5 =$ _____



For more worksheets, games and exercises:
www.timestables.com