

# 5 times table

Name: \_\_\_\_\_

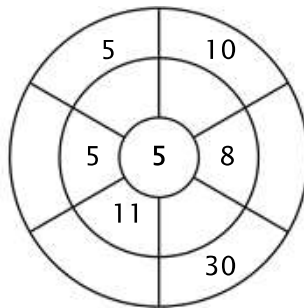
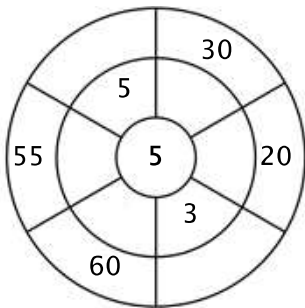
## Exercise 1:

Color in all of the boxes that are the solutions of this time table.

15	10	60	25	50
10	60	40	35	20
45	30	30	48	4
6	40	17	25	55
1	54	37	22	23

## Exercise 2:

Complete the circle by multiplying the number in the center by the middle ring to get the outer numbers.



## Exercise 3:

Fill in the correct product.

a)  $5 \times 4 =$  \_\_\_\_\_

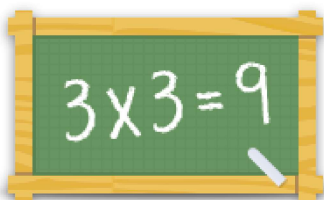
b)  $5 \times 11 =$  \_\_\_\_\_

c)  $5 \times 9 =$  \_\_\_\_\_

d)  $5 \times 8 =$  \_\_\_\_\_

e)  $5 \times 7 =$  \_\_\_\_\_

f)  $5 \times 6 =$  \_\_\_\_\_



For more worksheets, games and exercises:  
[www.timestables.com](http://www.timestables.com)