

6 times table

Name: _____

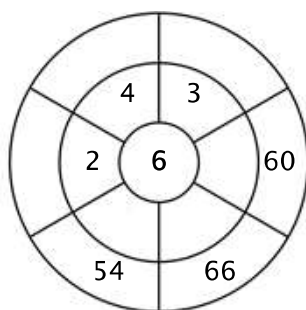
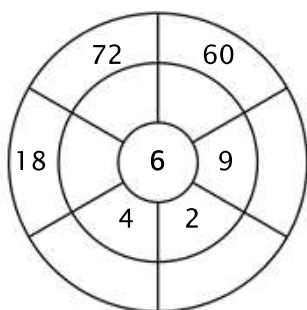
Exercise 1:

Color in all of the boxes that are the solutions of this time table.

60	18	36	24	5
65	44	21	36	72
54	42	23	22	55
5	30	6	60	66
9	72	30	18	48

Exercise 2:

Complete the circle by multiplying the number in the center by the middle ring to get the outer numbers.



Exercise 3:

Fill in the correct product.

a) $6 \times 7 =$ _____

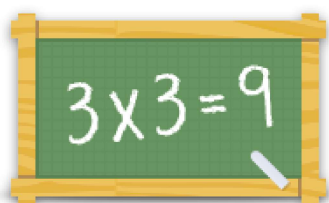
b) $6 \times 4 =$ _____

c) $6 \times 1 =$ _____

d) $6 \times 12 =$ _____

e) $6 \times 9 =$ _____

f) $6 \times 3 =$ _____



For more worksheets, games and exercises:
www.timestables.com