

8 times table

Name: _____

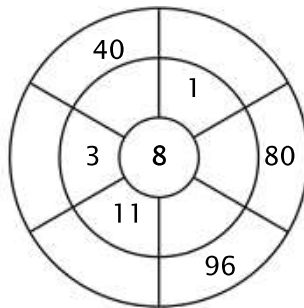
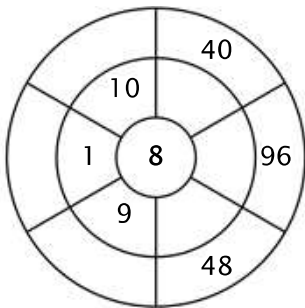
Exercise 1:

Color in all of the boxes that are the solutions of this time table.

45	48	1	16	72
8	64	56	7	23
88	32	80	16	55
80	56	88	33	18
21	22	64	55	40

Exercise 2:

Complete the circle by multiplying the number in the center by the middle ring to get the outer numbers.



Exercise 3:

Fill in the correct product.

a) $8 \times 12 =$ _____

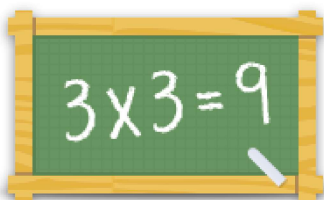
b) $8 \times 7 =$ _____

c) $8 \times 6 =$ _____

d) $8 \times 10 =$ _____

e) $8 \times 11 =$ _____

f) $8 \times 3 =$ _____



For more worksheets, games and exercises:
www.timestables.com