

9 times table

Name: _____

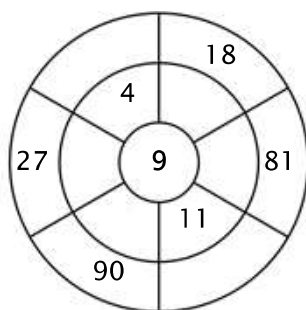
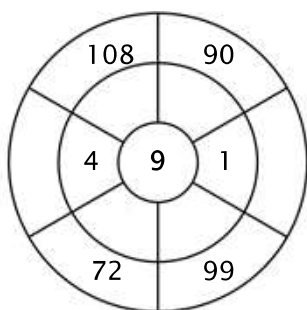
Exercise 1:

Color in all of the boxes that are the solutions of this time table.

81	59	95	9	79
54	81	45	37	5
3	45	18	11	72
27	19	9	8	65
18	36	99	63	69

Exercise 2:

Complete the circle by multiplying the number in the center by the middle ring to get the outer numbers.



Exercise 3:

Fill in the correct product.

a) $9 \times 5 =$ _____

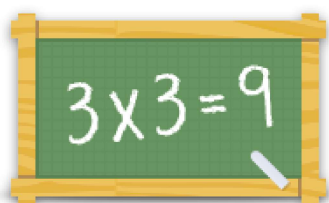
b) $9 \times 11 =$ _____

c) $9 \times 7 =$ _____

d) $9 \times 8 =$ _____

e) $9 \times 2 =$ _____

f) $9 \times 4 =$ _____



For more worksheets, games and exercises:
www.timestables.com